






Level 1

For office use only														
A1	Individual questionnaire number							A2	Household questionnaire number					
A3	Household control sheet number							A4	Pcode from household roster					

1.  +  = 

- a) 
- b) 
- c) 
- d) 

2. $12 \div 3 =$

- a) 2
b) 3
c) 4
d) 5

3. $4 \times 7 =$

- a) 4
b) 7
c) 18
d) 28

4. If you count by 2 which number should go next ? / Ukuba ubala ngezibini leliphi inani elilandelayo?

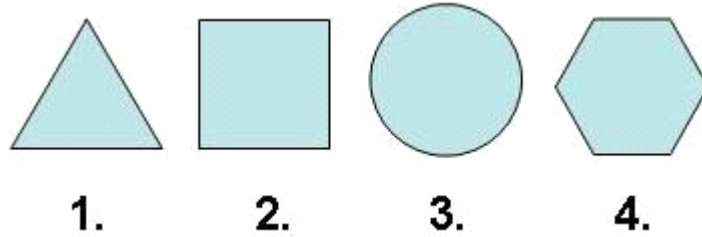
2 4 6 8 10 ?

- a) 10
b) 11
c) 12
d) 13

5. $16 \div 8 = 2$

- a) +
- b) -
- c) x
- d) \div

6. Which shape is the odd one out? / Sesiphi isimo esingangqinelaniyo nezinye?



- a) 1.
- b) 2.
- c) 3
- d) 4.

7. Which item is the cheapest? / Yeyiphi eyona nto itshiphu?



a) R1.80



b) R2.00



c) 0.90c



d) R5.00

8. What time is on the clock? / Lithini ixesha?




- a) 2
- b) 2:30
- c) 3
- d) 3:30

9. $1\text{cm} = ?$

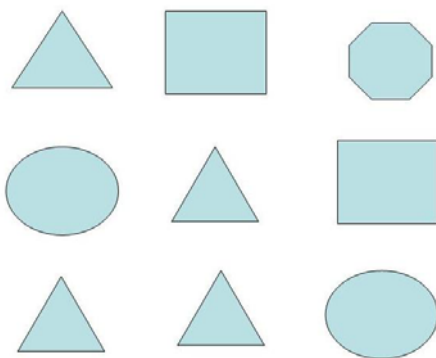
- a) 10 mm
- b) 100 mm
- c) 1000 mm
- d) 10000 mm

10. How many squares are shaded? / Zingaphi izikwere ezihlikhlwe zamnyama?




- a) 2 of 16 / 2 kwi- 16
- b) 3 of 16 / 3 kwi- 16
- c) 4 of 16 / 4 kwi- 16
- d) 5 of 16 / 5 kwi- 16

11. How many triangles are in this figure? / Bangaphi oonxantathu kulo mzobo?




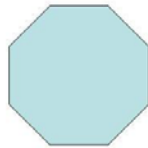
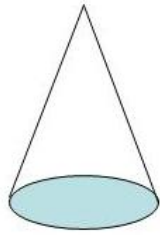
- a) 2
- b) 3
- c) 4
- d) 5

12. How many sides does this object have? / Le nto inamacala amangaphi?



- a) 4
- b) 5
- c) 6
- d) 7

13. Which shape makes base of the cone? / Sesiphi isimo esenza isiseko sembhumbhulu?



a)

b)

c)

d)

14. Which city had the hottest temperature? / Sesiphi isixeko esineqondo lobushushu elishushu kakhulu?

City / Isixeko	Temperature / Iqondo lobushushu ° C
Cape Town / IKapa	25
Johannesburg / IRhawuti	24
Harare / IHarare	20
Nairobi / INairobi	22

- a) Cape Town / IKapa
- b) Johannesburg / IRhawuti
- c) Harare / IHarare
- d) Nairobi / INairobi

15. How many of these numbers are greater than 6? / Kula manani ngawaphi angaphezulu kwesi- 6?

2, 4, 6, 3, 8, 1, 11, 12

- a) 3
- b) 4
- c) 6
- d) 7